


Divide by 10



1 Here are some crayons.



A pack holds 10 crayons.

How many packs can be made?

Complete the sentences.

There are crayons.

There are crayons in a pack.

$60 \div 10 =$

packs can be made.




2 Share 40 counters equally between 10 groups.



Complete the division.

$$40 \div \square = \square$$

3 Use the array to complete the fact family.



$$\square \times \square = \square$$

$$\square \times \square = \square$$

$$\square \div \square = \square$$

$$\square \div \square = \square$$


4 Write the missing numbers.

a) $70 \div 10 = \square$ d) $\square \text{ tens} \div 10 = 2$

b) $80 \div 10 = \square$ e) $\square \div 10 = 6$

c) $1 \text{ ten} \div 10 = \square$

5 Rosie has these number cards.



Complete the number sentences using only these numbers.

$$\square \div \square = \square$$
$$\square \times \square = \square$$

Are there any other ways to complete the sentences?

6 Tommy has 100 stickers for his sticker book. He can fit 10 stickers on each page. How many pages can Tommy fill?

$$\square \div \square = \square$$

Tommy can fill \square pages.

7 What is the mass of one of the boxes?

