

Select money

1 Circle 67p.



Is there another way to do it?

2 Circle three coins to show 57p.



3 Circle £68



Is there another way to do it?

4 Which pictures do **not** show £5 and 20p?
Tick your answers.





5 Draw coins to show the amount of money.


a) 52p

b) £8

c) £2 and 23p

6 Tommy wants to buy this comic book.

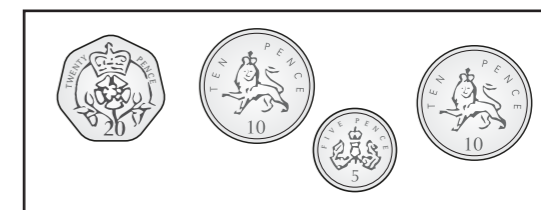



He has this money.



Circle the coins Tommy can use.

7 Which set of coins is the odd one out?

Tick your answer.



How did you work this out?

Compare answers with a partner.

