





I can solve problems using the bar model.

I can draw my own bars.

- 2 Abel has 6  . Jak has 9  . Kaya has 7  .
How many  are there altogether?

?		
Abel	Jak	Kaya

There are  altogether.

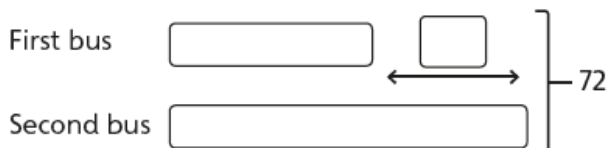
100

- 3 Sam scored 75 goals.
Jorge scored 48 goals.
How many more goals did Sam score?
- 4 Megan is 25 years old.
Genji is 16 years older than Megan.
What is the total of their ages?

- 5 Two buses have 72 people on them, in total.

The first has 28 people on it.

How many more people are on the second bus than on the first?



There are people on the second bus.

There are more people on the second bus than on the first.

CHALLENGE