
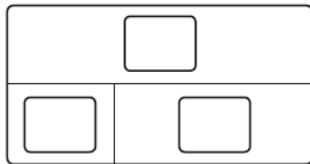


1 Martha sells 31 cards on Monday.

She sells 57 cards on Tuesday.

How many does she sell in total?

Complete the bar model.


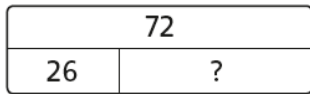


Martha sells cards in total.

2 72 people are watching a film.

26 of them are adults.

How many children are there?



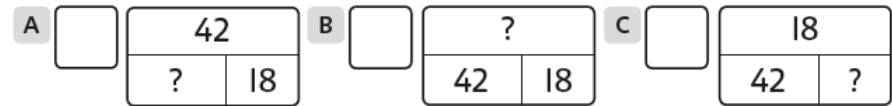
There are children.

3 Amy has some conkers. 

She finds 18 more. Now she has 42.



How many conkers did she have at the start?

 the bar model which shows this.




How do you know?




4 Eva rolls three  . 

She rolls 5 on the first and 6 on the second.

Her total score is 13.

What does she roll on the third  ?

Show this on a bar model.



Eva rolls on the third .